

EVERWIN VIDHYASHRAM
HALF YEARLY ASSESSMENT

16.09.2019

STD I _____

MATHS

MARKS: 80

NAME: _____

ROLL NO: _____

I. Write the numerals:

4

475				
				484

II. A. Missing numbers:

$4 \times 1\frac{1}{2} = 6$

a. 344, _____, _____, _____.

b. 115, _____, _____, _____.

c. 277, _____, _____, _____.

d. 493, _____, _____, _____.

B. Write the number names:

$4 \times 2 = 8$

a. 18 - _____.

b. 100 - _____.

c. 46 - _____.

d. 35 - _____.

III. A. Write in Ascending order:

$2 \times 1\frac{1}{2} = 3$

i. 17, 8, 28

Ans: _____.

ii. 32, 48, 21

Ans: _____.

B. Circle the smallest numbers:

$3 \times 1 = 3$

a. 11, 3, 42

b. 25, 34, 18

c. 36, 32, 8

IV. A. Write in descending order:

$2 \times 1\frac{1}{2} = 3$

i. 18, 45, 36 - _____

ii. 22, 44, 42 - _____

B. Circle the biggest numbers:

3x1=3

a. 12, 7, 19

b. 14, 33, 21

c. 20, 50, 40

C. Write the backward numbers:

4

25				
				16

V. Write the before, after & between numbers:

5x1=5

a. 18, _____.

b. 83, _____, 85.

c. _____, 62.

d. 56, _____, 58.

e. _____, 49.

VI. Comparison of numbers: (< , > or =)

5x1=5

a. 41 28

b. 30 30

c. 23 32

d. 45 50

e. 16 16

VII. Write table – 3:

(5)

VIII. A. Skip counting by 2's:

$6 \times \frac{1}{2} = 3$

a. 17, _____, _____, 23.

b. 4, _____, _____, 10.

c. 18, _____, _____, 24.

B. Skip counting by 3's.

$6 \times \frac{1}{2} = 3$

a. 9, _____, _____, 18.

b. 26, _____, _____, 35.

c. 12, _____, _____, 21.

IX. A. Match the following:

$4 \times 1 = 4$

- | | | |
|-----------------|---|----------|
| i. Carrom board | - | circle |
| ii. Coin | - | square |
| iii. Samosa | - | cone |
| iv. Ice cream | - | triangle |

B. Draw the shapes:

$3 \times 1 = 3$

- | | | |
|---------------|---|-------|
| i. Oval | = | _____ |
| ii. Triangle | = | _____ |
| iii. Cylinder | = | _____ |

X. Addition:

$4 \times 2 = 8$

		T O		T O
a. 5	b. 7	c. 3 6	d. 4	3
+ 1	+ 0	+ 2	+ 2	2
_____	_____	_____	_____	_____
_____	_____	_____	_____	_____

XI. Word problem:

$2 \times 2\frac{1}{2} = 5$

1. Ram has 6 balloons and Raju has 3 balloons. How many balloons are there in all?

No. of balloons Ram has	=	_____
No. of balloons Raju has	=	_____
Total no. of balloons	=	_____


2. Renu has 5 pencils and Reema has 2 pencils. How many pencils are there in all?




No. of pencils Renu has = _____
No. of pencils Reema has = _____
Total no. of pencils = _____

XII. Multiple Choice Questions:

5x1=5

1. Complete the pattern:




- a.  b.  c. 

2. $5 + \underline{\hspace{2cm}} = 5$.

- a. 0 b. 5 c. 1

3. How many Triangles are there in the given picture.



- a. 5 b. 6 c. 4

4. Choose the correct symbol for the following:

$4 + 1$  $5 + 1$

- a. > b. < c. =

5. If you want to make these balls to be equal on both sides. How many more you need?



- a. 2 balls b. 3 balls c. 4 balls